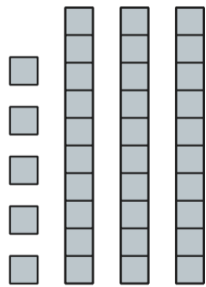




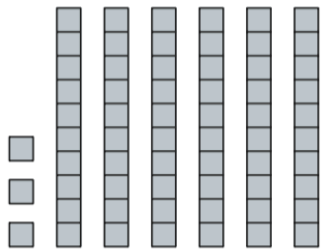
Name: _____

Directions: 1.) Count the blocks 2.) Show how many tens & one 3.) Write in addition sentence 4.) Write in the number



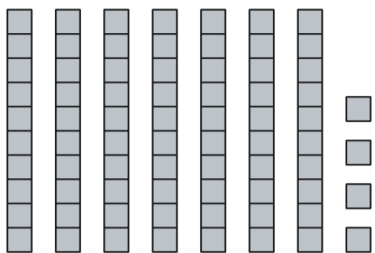
_____ tens and _____ ones _____ + _____ = _____

Number:



_____ tens and _____ ones _____ + _____ = _____

Number:



_____ tens and _____ ones _____ + _____ = _____

Number: