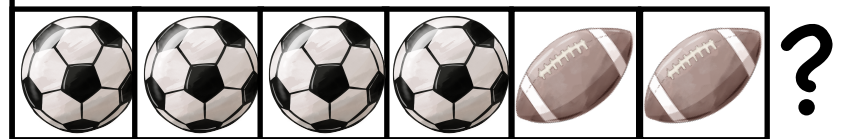


4  and 2 

How many balls altogether?


$$4 + 2 = 6$$



2  and 4 

How many balls in all?

$$2 + 4 = 6$$

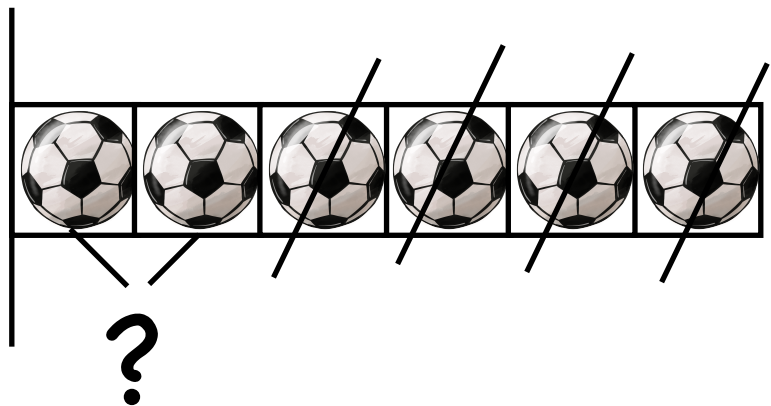


6



Four balls pop. How many are left?


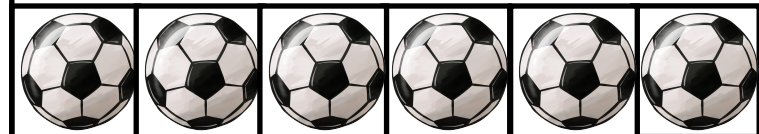
$$6 - 4 = 2$$



6  and 2 

How many more  than  ?

$$6 - 2 = 4$$



?