



Kids in the Tent


There are 10 friends going camping. Some of the friends are around the campfire and some of the friends are in the tent. Look at the pictures below and figure out how many friends are still in the tent. Fill in the number sentence to match.



$$10 = \underline{\quad} + \underline{\quad}$$



$$10 = \underline{\quad} + \underline{\quad}$$



$$10 = \underline{\quad} + \underline{\quad}$$



$$10 = \underline{\quad} + \underline{\quad}$$