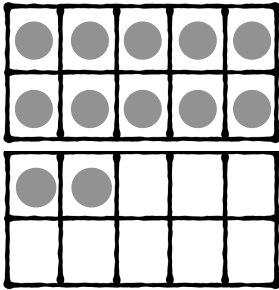



Match Up Equations and 10-Frames


Directions: Draw a line to match the double 10-frame with the equation that represents the same number.




$$10 + 8 = 18$$




$$10 + 5 = 15$$



$$10 + 2 = 12$$



$$10 + 9 = 19$$



$$10 + 4 = 14$$