





Race to Subtract with D.C. & Springling

Directions:

Take turns rolling a die and moving the amount rolled on the game board. Find the answer for the expression that you landed on using DC or Springling's strategy. Fill out the recording sheet and circle which strategy you used. The first player to reach the end wins!

Example of both strategies:

		Strategy		
Roll	Equation	D.C. (Decompose/ compose)	Springling (counting up and back)	Show your work
1	$53 - 27 = \underline{\quad}$			$53 - 27 =$ $\begin{array}{r} \wedge \quad \wedge \\ 40 \ 13 \ 20 \ 7 \\ 40 - 20 = 20 \\ 13 - 7 = 6 \\ 20 + 6 = 26 \end{array}$
2	$53 - 27 = \underline{\quad}$			$\begin{array}{ccccccc} & \frown & & \frown & & \frown & \\ & 3 & + & 20 & + & 3 & \\ 27 & & & 30 & & 50 & 53 \end{array}$ $20 + 3 + 3 = 26$

Race to Subtract with D.C. & Springling Game Board



$26 - 17$

$37 - 29$

$58 - 39$

$81 + 17$

Go
forward
2

Go
forward
2

$32 - 35$

$71 - 14$

Miss a
turn

$42 - 33$


$71 - 22$

Go
back 3

$74 - 26$

$55 - 26$

$77 - 18$



END

$28 - 19$

$48 - 39$

$61 - 47$

Miss a
turn

















$63 - 28$

Go
back 5















$67 + 24$

START

Player 1 Recording Sheet

		Strategy		
Roll	Equation	D.C. (Decompose/ compose)	Springling (counting up and back)	Show your work
1				
2				
3				
4				
5				
6				
7				
8				

Player 2 Recording Sheet

		Strategy		
Roll	Equation	D.C. (Decompose/ compose)	Springling (counting up and back)	Show your work
1				
2				
3				
4				
5				
6				
7				
8		