

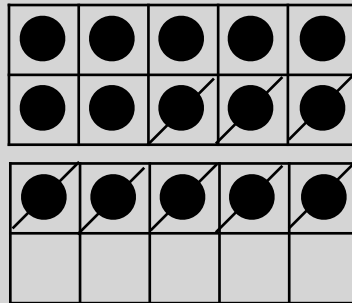
Subtracting with Take Away & Counting Up!

Directions: Use the double ten frame to solve two with take away and then use the double ten frame mat to solve with counting up.

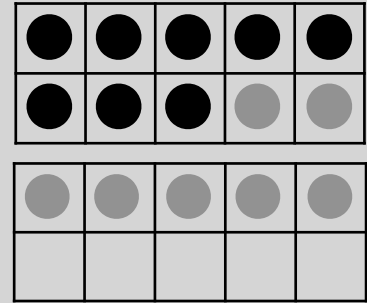
Example:

$$15 - 8 = \underline{7}$$

Take Away

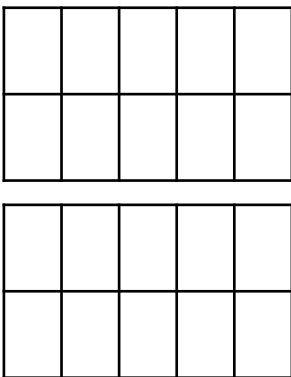


Counting Up




$$17 - 6 = \underline{\quad}$$

Take Away

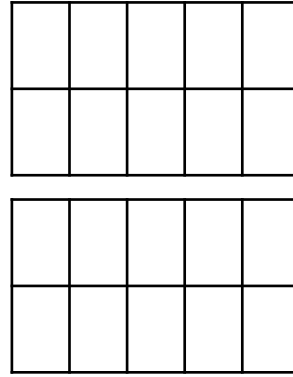


Counting Up




$$19 - 6 = \underline{\quad}$$

Take Away




Counting Up




$$18 - 5 = \underline{\quad}$$

Take Away




Counting Up



$$16 - 9 = \underline{\quad}$$

Take Away



Counting Up

